



GALATA YÖS-SAT YAYINLARI

YÖS

Yeni Tarz Sorular

New Style Questions

KOLAY











GEOMETRİ

Easy Geometry

Soru Bankası / Question bank



YAYINLARIMIZ PUBLICATIONS



GALATA YÖS-SAT YAYINLARI

Barbaros Hayrettin Paşa Mah. 1993 Sk.
No: 22 Esenyurt Cumhuriyet Mah



(0212) 695 90 31



0541 695 90 31

www.galataegitim.com

ISBN 605-06867-0-8



9 786050 686708

Bu kitabın tüm hakları Sarıkaya eğitim danışmanlık hizmetleri limitet şirketine aittir. Bu kitabın tamamını veya bir kısmını elektronik, mekanik, fotokopi ya da herhangi bir kayıt sistemiyle çoğaltılması ve yayımlanması yasaktır.

All rights reserved. No part of this publication may be reproduced, stored in a retrieval system, or transmitted, in any form or by any means, without the prior permission in writing of sarikaya education consultancy services limited company. Published by sarikaya education consultancy services limited company.

● **ISBN:** 978 – 605 – 06867–0–8

● **Yayın kurulu / Publishing Board**
Galata

● **Birinci baskı / First Edition**
Mart 2020

● **Kapak tasarımı / Cover Design**
Tirkish Gurbanov

● **Baskı / Press**
Aykut Basım

ÖNSÖZ

Değerli öğretmen ve sevgili öğrencilerimiz;

Galata Eğitim kurumları, 2005'ten bugüne YÖS, SAT ve TÖMER sınavlarına hazırlanan öğrencilerimize eğitim öğretimin yanısıra rehberlik hizmetleri de veren bir eğitim kurumudur.

Kurumumuz ülkemizde YÖS'e girecek öğrencilerle birlikte dünyanın farklı yerlerinden ülkemize gelen uluslararası öğrencilere de YÖS'e hazırlanma aşamasında şu hizmetleri vermektedir;

- Ders çalışma teknikleri
- Üniversite ve bölüm bilgileri
- Başvuru ve tercih aşamasında rehberlik hizmetleri

Öğrencilerimiz bu aşamalardan doğru yönlendirmelerle geçerek, adım adım başarıya ulaşması sağlanmaktadır.

Elinizde bulunan Geometri soru bankası, Üniversitelerin son yıllarda YÖS'te sormuş oldukları yeni tarz sorulara göre hazırlanmıştır. Bütün konuları kapsayacak şekilde her tarz sorudan hazırlanan kitabımız, sizleri başarıya ulaştıracak ve sınavlarda karşınıza çıkacak sorularda pratiklik kazandıracaktır. Değerli öğretmen ve sevgili öğrencilerimize faydalı olması dileğiyle.

FOREWORD

Dear teachers and students;

Galata educational center is an educational institution that provides guidance services to the students who have been preparing for YÖS, SAT, and TÖMER exams since 2005.

Our institution is a hub of attraction for students from all over the world, for it familiarizes students with study techniques, provides information and details about universities and departments, and offers guidance services during application and preferences for the universities. And by doing so, it ensures success for our students.

The questions in the Geometry question bank were prepared correspondingly, through the years of experience to help you get a perfect score on the exam. All the questions are parallel and identical to the YOS exam questions. It covers all the topics which are in Math 1.

We hope to be beneficial to our valuable teachers and dear students

İÇİNDEKİLER

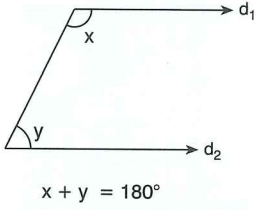
Doğruda Açılar / Angles Directly	9
Üçgende Açılar / Angles of Triangles	23
Dik Üçgen / Right Triangle	41
İkizkenar Üçgen / Isosceles Triangle	59
Eşkenar Üçgen / Equilateral Triangle	69
Açıortay / Bisector	77
Kenarortay / Median	91
Üçgende Benzerlik / Similarity of Triangles	105
Üçgende Alan / Areas of Triangles	119
Açı - Kenar Bağıntıları / Angle - Side Relations	135
Çokgenler / Polygons	147
Dörtgenler / Quadrilaterals	163
Paralelkenar / Parallelogram	179
Eşkenar Dörtgen / Rhombus	195
Yamuk / Trapezoid	207
Deltoid / Deltoid	223
Dikdörtgen / Rectangle.....	231
Kare / Square	245
Çemberde Açık / Angle in the Circle.....	259
Çemberde Uzunluk / Length in Circle	275
Dairede Alan / Circle	289
Prizmalar / Prisms	301
Piramitler / Pyramids	311
Analitik Geometri / Analytical geometry	321
Doğru Analitiği / Right Analytics	329
Simetri / Symmetry	339
Çemberin Analitiği / Circle Analytics	347
Vektörler / Vectors	359

ÜNİTE 1

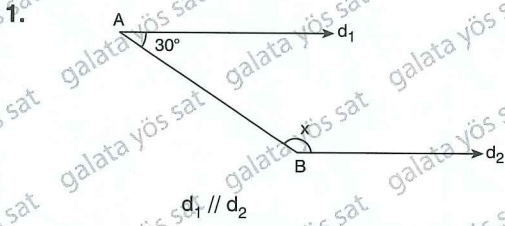
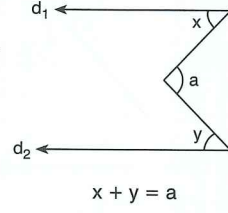
Unit 1

Doğruda Açılar /
Angles Directly

$(d_1 \parallel d_2)$



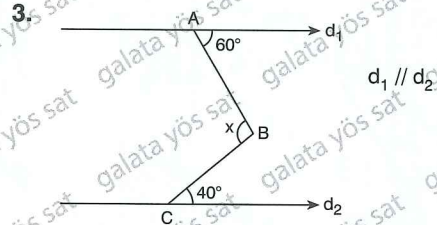
$(d_1 \parallel d_2)$



Yukarıdaki verilere göre, x in değeri nedir?

According to the above data, what is the value of x = ?

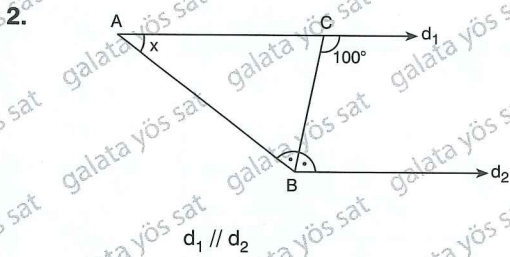
- A) 30 B) 60 C) 90 D) 120 E) 150



Yukarıdaki verilere göre, x in değeri nedir?

According to the above data, what is the value of x = ?

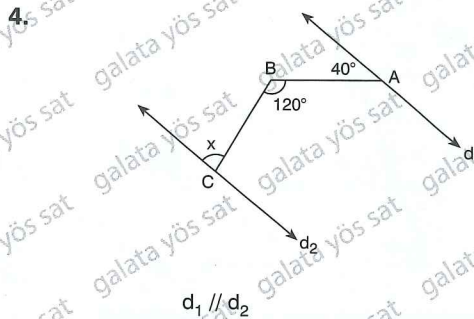
- A) 115 B) 110 C) 105 D) 100 E) 95



Yukarıdaki verilere göre, x in değeri nedir?

According to the above data, what is the value of x = ?

- A) 10 B) 20 C) 30 D) 40 E) 50

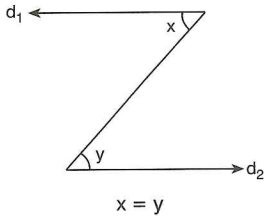


Yukarıdaki verilere göre, x in değeri nedir?

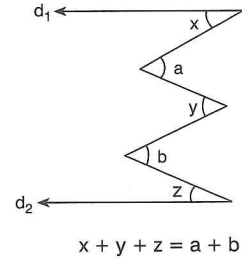
According to the above data, what is the value of x = ?

- A) 60 B) 70 C) 80 D) 90 E) 100

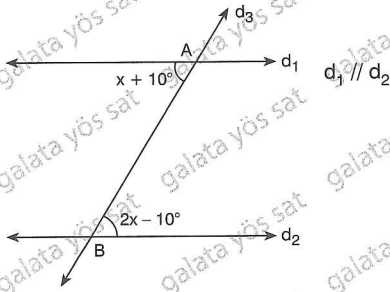
$(d_1 \parallel d_2)$



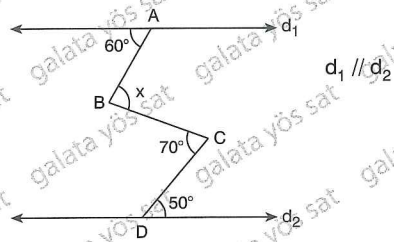
$(d_1 \parallel d_2)$



1.



3.



Yukarıdaki verilere göre, x in değeri nedir?

Yukarıdaki verilere göre, x in değeri nedir?

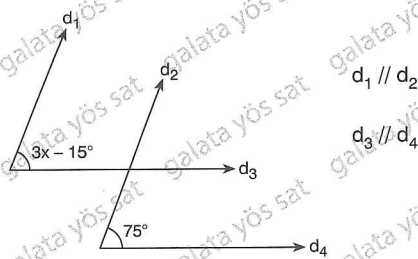
According to the above data, what is the value of x = ?

According to the above data, what is the value of x = ?

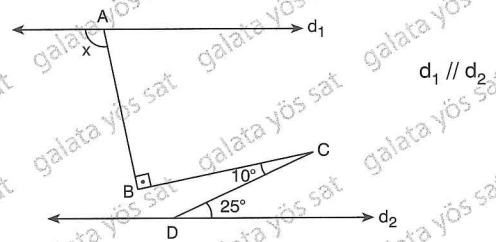
- A) 10 B) 20 C) 30 D) 40 E) 50

- A) 80 B) 90 C) 100 D) 110 E) 120

2.



4.



Yukarıdaki verilere göre, x in değeri nedir?

Yukarıdaki verilere göre, x in değeri nedir?

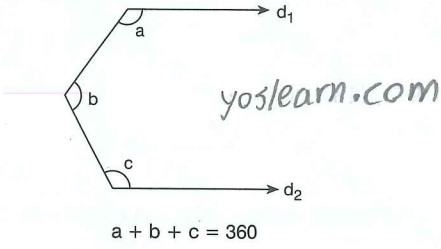
According to the above data, what is the value of x = ?

According to the above data, what is the value of x = ?

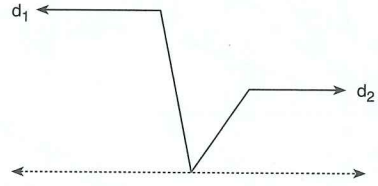
- A) 45 B) 40 C) 35 D) 30 E) 25

- A) 100 B) 105 C) 110 D) 115 E) 120

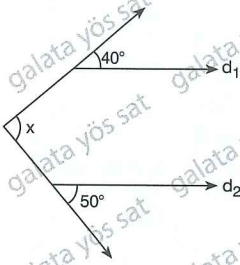
$(d_1 \parallel d_2)$



$(d_1 \parallel d_2)$



1.



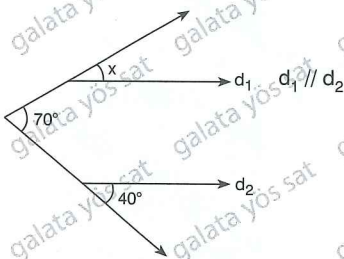
$d_1 \parallel d_2$

Yukarıdaki verilere göre, x in değeri nedir?

According to the above data, what is the value of x = ?

- A) 60 B) 70 C) 80 D) 90 E) 100

2.

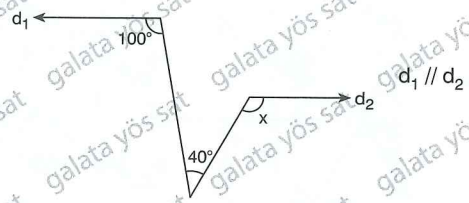


Yukarıdaki verilere göre, x in değeri nedir?

According to the above data, what is the value of x = ?

- A) 40 B) 35 C) 30 D) 25 E) 20

3.

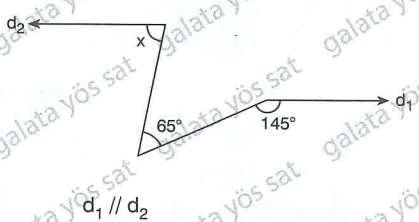


Yukarıdaki verilere göre, x in değeri nedir?

According to the above data, what is the value of x = ?

- A) 120 B) 110 C) 100 D) 90 E) 80

4.

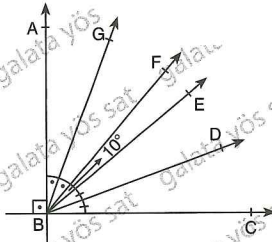


Yukarıdaki verilere göre, x in değeri nedir?

According to the above data, what is the value of x = ?

- A) 80 B) 90 C) 100 D) 110 E) 120

1.



$$d_1 \parallel d_2$$

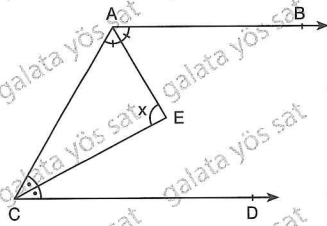
$$m(\widehat{GBD}) = x$$

Yukarıdaki verilere göre, x in değeri nedir?

According to the above data, what is the value of $x = ?$

- A) 48 B) 49 C) 50 D) 51 E) 52

2.



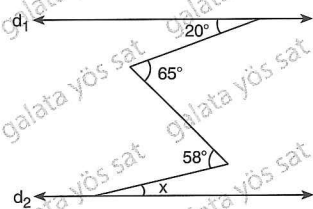
$$[AB \parallel CD$$

Yukarıdaki verilere göre, x in değeri nedir?

According to the above data, what is the value of $x = ?$

- A) 80 B) 90 C) 100 D) 110 E) 120

3.



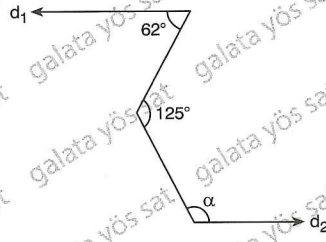
$$d_1 \parallel d_2$$

Yukarıdaki verilere göre, x in değeri nedir?

According to the above data, what is the value of $x = ?$

- A) 10 B) 11 C) 12 D) 13 E) 14

4.



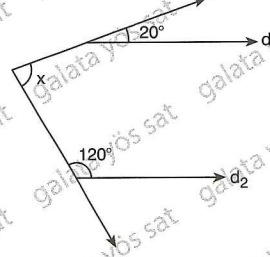
$$d_1 \parallel d_2$$

Yukarıdaki verilere göre, x in değeri nedir?

According to the above data, what is the value of $x = ?$

- A) 113 B) 114 C) 115 D) 117 E) 119

5.



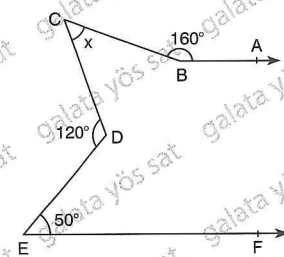
$$d_1 \parallel d_2$$

Yukarıdaki verilere göre, x in değeri nedir?

According to the above data, what is the value of $x = ?$

- A) 80 B) 90 C) 100 D) 110 E) 120

6.

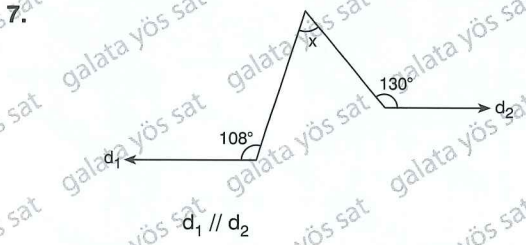


$$[BA \parallel EF$$

Yukarıdaki verilere göre, x in değeri nedir?

According to the above data, what is the value of $x = ?$

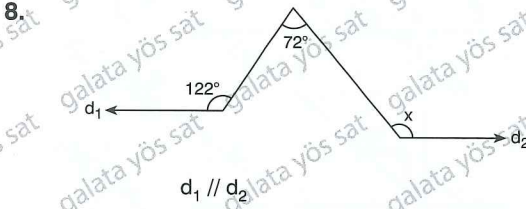
- A) 40 B) 50 C) 60 D) 70 E) 80



Yukarıdaki verilere göre, x in değeri nedir?

According to the above data, what is the value of x = ?

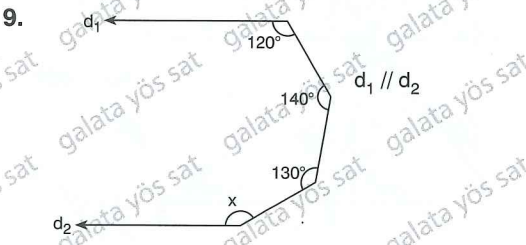
- A) 48 B) 58 C) 68 D) 78 E) 88



Yukarıdaki verilere göre, x in değeri nedir?

According to the above data, what is the value of x = ?

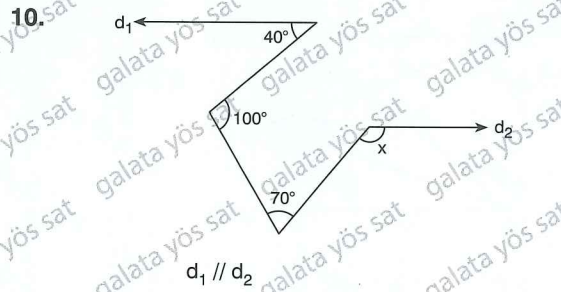
- A) 122 B) 130 C) 140 D) 152 E) 160



Yukarıdaki verilere göre, x in değeri nedir?

According to the above data, what is the value of x = ?

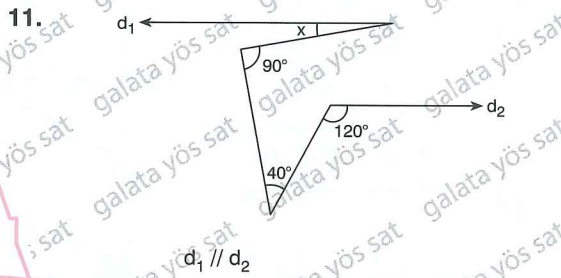
- A) 170 B) 160 C) 150 D) 140 E) 100



Yukarıdaki verilere göre, x in değeri nedir?

According to the above data, what is the value of x = ?

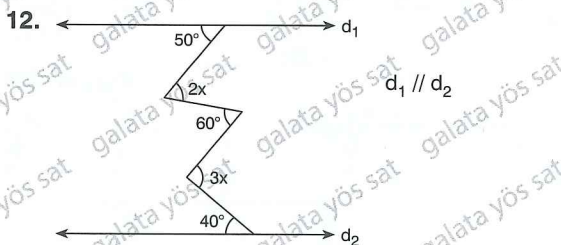
- A) 110 B) 120 C) 130 D) 140 E) 150



Yukarıdaki verilere göre, x in değeri nedir?

According to the above data, what is the value of x = ?

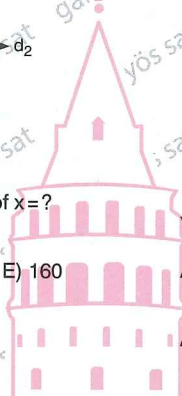
- A) 10 B) 120 C) 30 D) 40 E) 50



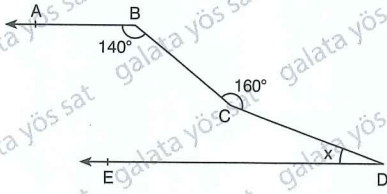
Yukarıdaki verilere göre, x in değeri nedir?

According to the above data, what is the value of x = ?

- A) 60 B) 50 C) 40 D) 30 E) 20



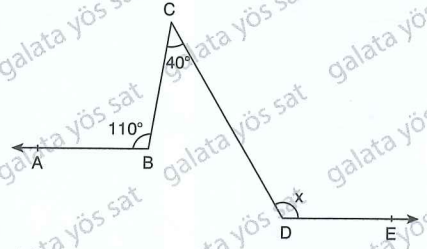
7.



$[BA \parallel DE, m(\widehat{ABC}) = 140^\circ, m(\widehat{BCD}) = 160^\circ$
 $m(\widehat{CDE}) = x = ?$

- A) 20 B) 30 C) 40 D) 50 E) 60

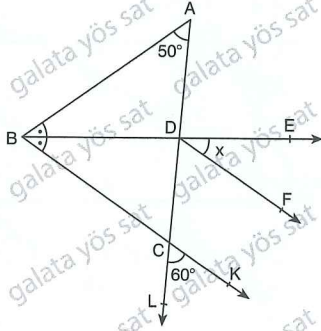
10.



$[BA \parallel DE, m(\widehat{ABC}) = 110^\circ, m(\widehat{BCD}) = 40^\circ$
 $m(\widehat{CDE}) = x = ?$

- A) 110 B) 120 C) 130 D) 140 E) 150

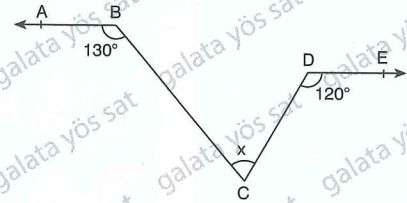
8.



$[DF \parallel BK$
 $m(\widehat{BAL}) = 50^\circ$
 $m(\widehat{LCK}) = 60^\circ$
 $m(\widehat{EDF}) = x = ?$

- A) 60 B) 55 C) 50 D) 45 E) 35

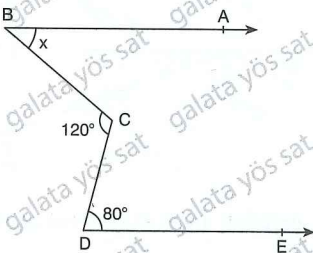
11.



$[BA \parallel DE, m(\widehat{ABC}) = 130^\circ, m(\widehat{CDE}) = 120^\circ$
 $m(\widehat{BCD}) = x = ?$

- A) 65 B) 70 C) 75 D) 80 E) 85

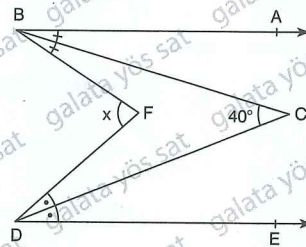
9.



$[BA \parallel DE$
 $m(\widehat{BDC}) = 120^\circ$
 $m(\widehat{CDE}) = 80^\circ$
 $m(\widehat{ABC}) = x = ?$

- A) 30 B) 35 C) 40 D) 45 E) 50

12.

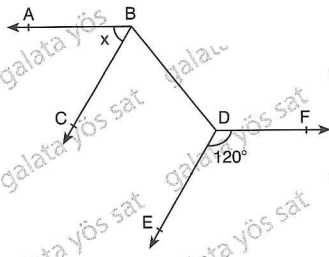


$[BA \parallel DE$
 $m(\widehat{ABC}) = m(\widehat{CBF})$
 $m(\widehat{FDC}) = m(\widehat{CDE})$
 $m(\widehat{BCD}) = 40^\circ$
 $m(\widehat{BFD}) = x = ?$

- A) 60 B) 70 C) 80 D) 90 E) 100



1.



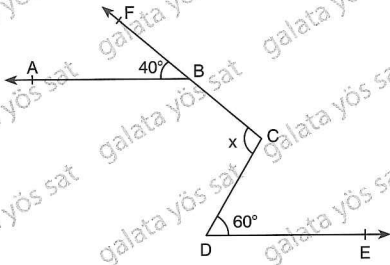
$[BC \parallel DE$

$[BA \parallel DF$

$x = ?$

- A) 50 B) 55 C) 60 D) 65 E) 70

2.

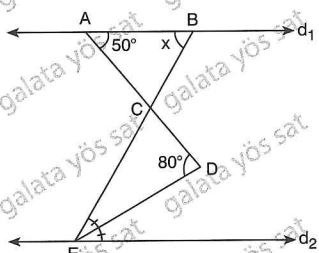


$[BA \parallel DE, \quad m(\widehat{FBA}) = 40^\circ, \quad m(\widehat{CDE}) = 60^\circ$

$m(\widehat{BCD}) = x = ?$

- A) 90 B) 100 C) 110 D) 120 E) 130

3.



$d_1 \parallel d_2$

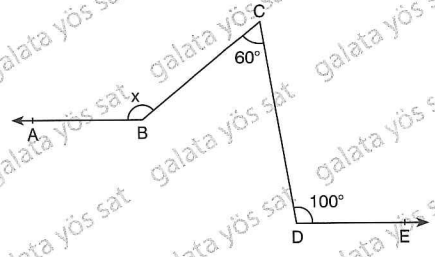
$m(\widehat{DAB}) = 50^\circ$

$m(\widehat{ADE}) = 80^\circ$

$m(\widehat{ABC}) = x = ?$

- A) 50 B) 60 C) 70 D) 80 E) 90

4.

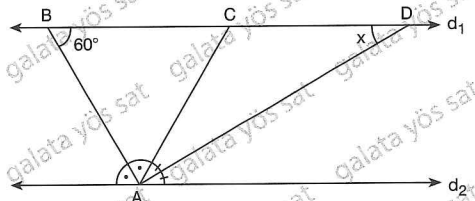


$[BA \parallel DE$

$m(\widehat{ABC}) = x = ?$

- A) 140 B) 144 C) 148 D) 152 E) 156

5.

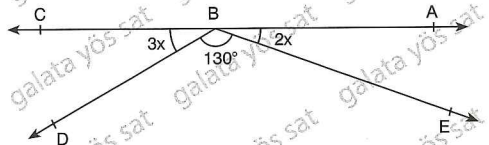


$d_1 \parallel d_2$

$x = ?$

- A) 30 B) 40 C) 50 D) 60 E) 70

6.



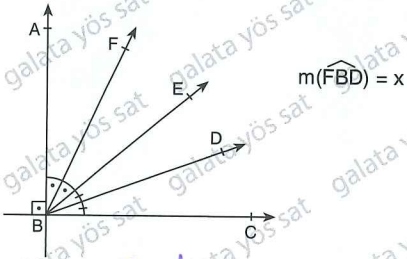
A, B, C noktaları doğrusal (A, B, C are linear points)

$x = ?$

- A) 5 B) 10 C) 15 D) 20 E) 25

Doğrudada Açılar / Angles Directly

7.



$$m(\widehat{FBD}) = x$$

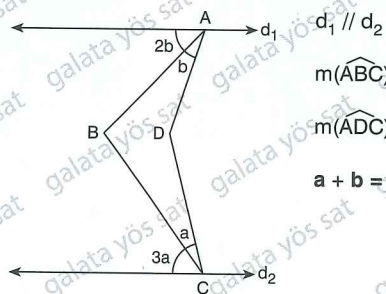
Yoskarn.com

Yukarıdaki verilere göre, x in değeri nedir?

According to the above data, what is the value of x = ?

- A) 25 B) 30 C) 40 D) 45 E) 50

10.



$$d_1 \parallel d_2$$

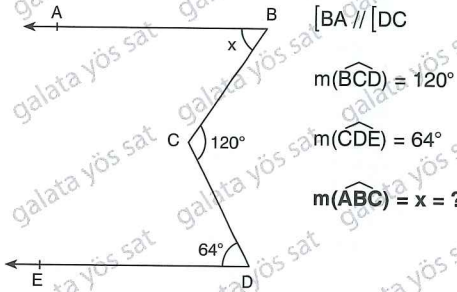
$$m(\widehat{ABC}) = 105^\circ$$

$$m(\widehat{ADC}) = 150^\circ$$

$$a + b = ?$$

- A) 30 B) 35 C) 40 D) 45 E) 50

8.



$$[BA \parallel DC]$$

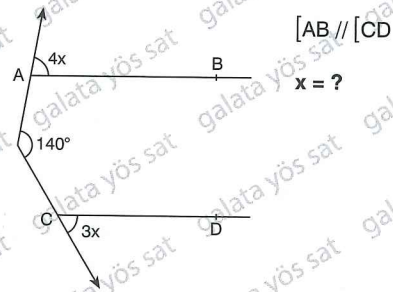
$$m(\widehat{BCD}) = 120^\circ$$

$$m(\widehat{CDE}) = 64^\circ$$

$$m(\widehat{ABC}) = x = ?$$

- A) 50 B) 52 C) 54 D) 56 E) 58

11.

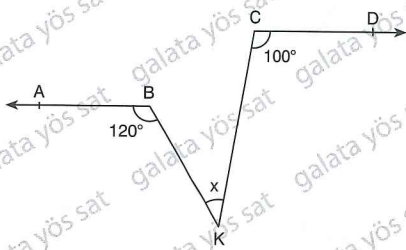


$$[AB \parallel CD]$$

$$x = ?$$

- A) 10 B) 20 C) 30 D) 40 E) 50

9.

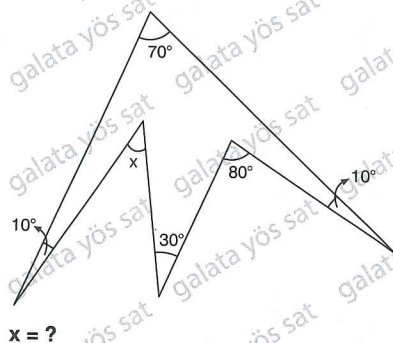


$$[BA \parallel CD]$$

$$m(\widehat{BKC}) = x = ?$$

- A) 40 B) 35 C) 30 D) 25 E) 20

12.



$$x = ?$$

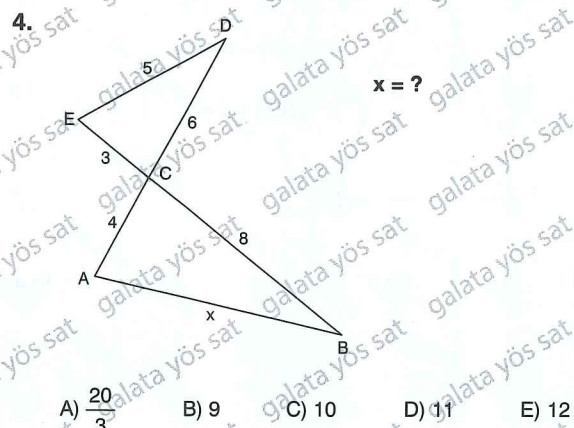
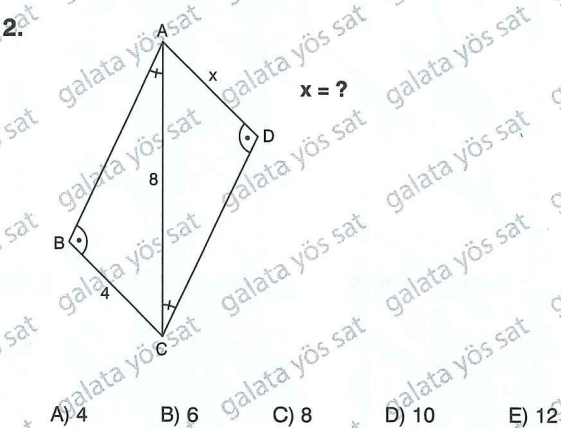
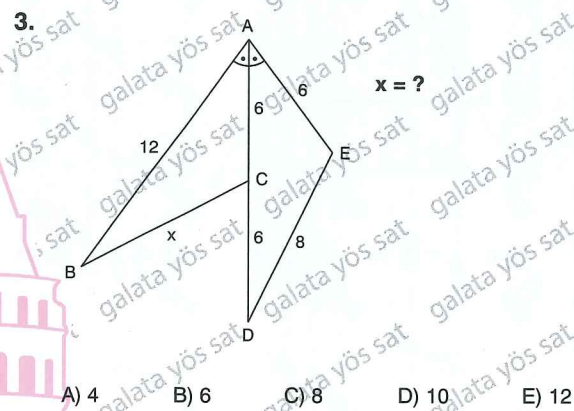
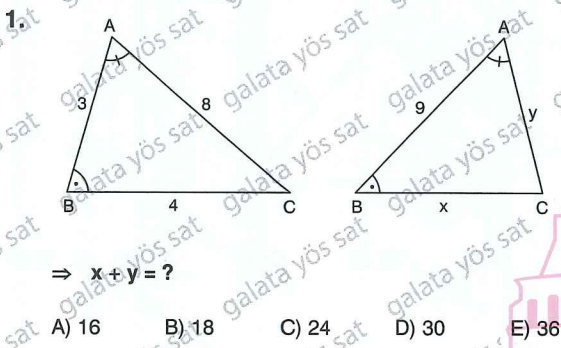
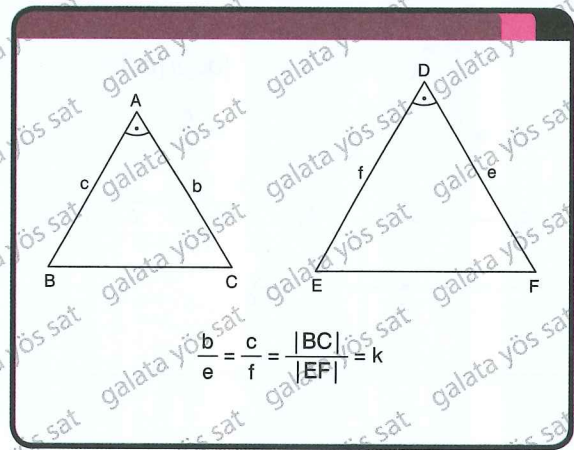
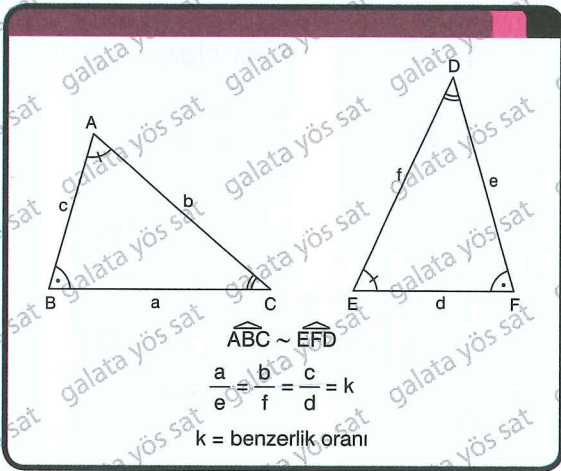
- A) 40 B) 41 C) 42 D) 43 E) 44

ÜNİTE 8

Unit 8

Üçgende Benzerlik /
Similarity of Triangles

Üçgende Benzerlik / Similarity of Triangles



$[DE] \parallel [BC] \Rightarrow$

$$\Rightarrow \frac{a}{b} = \frac{c}{d}$$

$$\frac{a}{a+b} = \frac{c}{c+d} = \frac{x}{y}$$

$[AB] \parallel [DE]$

$$\Rightarrow \frac{x}{y} = \frac{a}{b} = \frac{c}{d}$$

1. $[DE] \parallel [BC]$
 $x = ?$

A) 6 B) 12 C) 16 D) 18 E) 24

3. $[AB] \parallel [DE]$
 $x + y = ?$

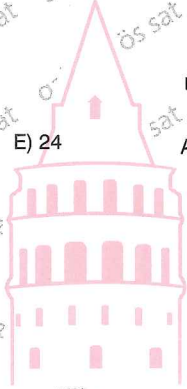
A) 20 B) 22 C) 24 D) 26 E) 28

2. $[BC] \parallel [DE]$
 $|AD| = 18$
 $|AC| = 2|CE|$
 $|BD| = x = ?$

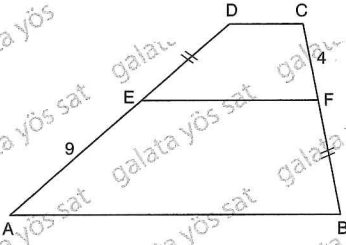
A) 8 B) 7 C) 6 D) 5 E) 4

4. $[DE] \parallel [AB]$
 $x = ?$

A) 10 B) 12 C) 14 D) 16 E) 18



1.

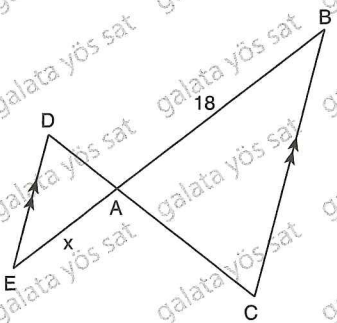


$$[DC] \parallel [EF] \parallel [AB]$$

$$\Rightarrow |BF| = |DE| = ?$$

- A) 7 B) 6 C) 5 D) 4 E) 3

2.



$$[DE] \parallel [BC]$$

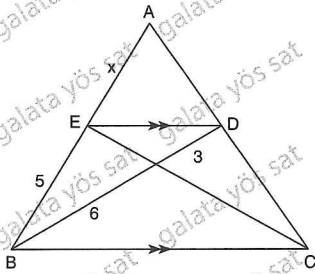
$$3|DA| = |AC|$$

$$|AB| = 18 \text{ cm}$$

$$x = ?$$

- A) 9 B) 8 C) 7 D) 6 E) 5

3.

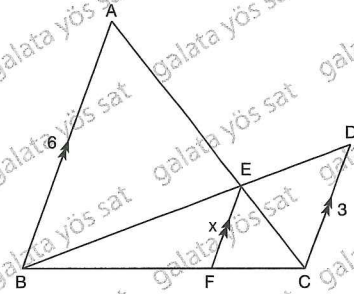


$$[DE] \parallel [BC]$$

$$x = ?$$

- A) 4 B) 5 C) 6 D) 7 E) 8

4.

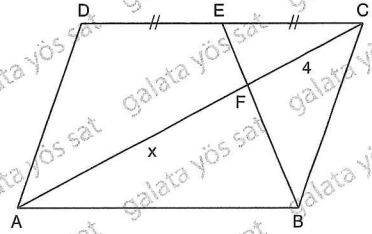


$$[AB] \parallel [EF] \parallel [DC]$$

$$\Rightarrow x = ?$$

- A) 1 B) $\frac{3}{2}$ C) 2 D) $\frac{5}{2}$ E) 3

5.

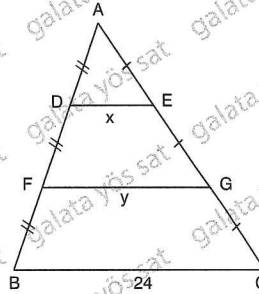


ABCD paralelkenar (ABCD paralellogram), $|CF| = 4 \text{ cm}$

$$x = ?$$

- A) 4 B) 6 C) 8 D) 10 E) 12

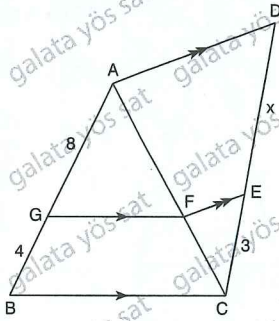
6.



$$x + y = ?$$

- A) 48 B) 40 C) 36 D) 30 E) 24

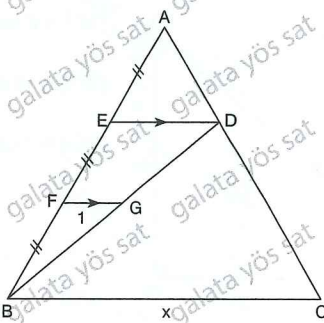
7.



$[GF] \parallel [BC]$
 $[AD] \parallel [EF]$
 $|AG| = 8 \text{ cm}$
 $|BG| = 4 \text{ cm}$
 $|CE| = 3 \text{ cm}$
 $x = ?$

- A) 10 B) 9 C) 8 D) 7 E) 6

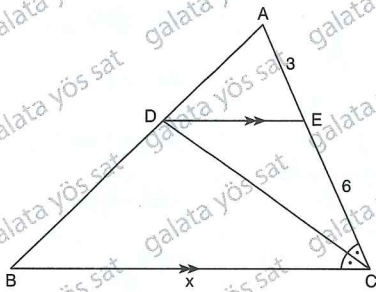
8.



$[ED] \parallel [FG] \parallel [BC]$
 $|AE| = |EF| = |FB|$
 $|FG| = 1 \text{ cm}$
 $x = ?$

- A) 2 B) 4 C) 6 D) 8 E) 10

9.

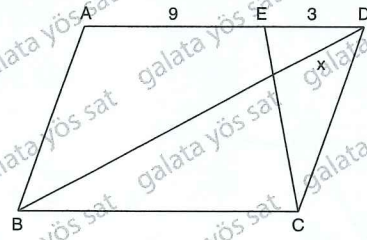


$[DE] \parallel [BC]$

$\Rightarrow x = ?$

- A) 12 B) 18 C) 20 D) 24

10.

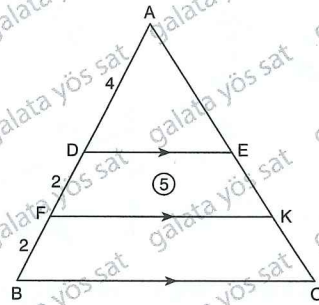


ABCD paralelkenar (ABCD parallelogram), $|BD| = 20 \text{ cm}$

$\Rightarrow x = ?$

- A) 1 B) 2 C) 3 D) 4 E) 5

11.

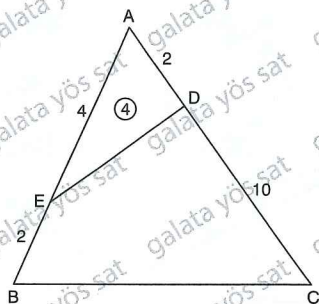


$[DE] \parallel [FK] \parallel [BC]$

$\Rightarrow A(BCKF) = ?$

- A) 2 B) 4 C) 7 D) 8 E) 10

12.

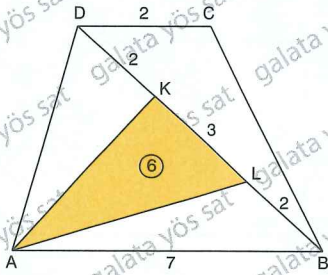


$\Rightarrow A(ABC) = ?$

- A) 5 B) 9 C) 16 D) 20 E) 36



1.



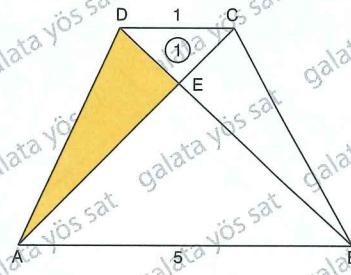
ABCD yamuk (ABCD trapezoid)

$$|DC| = |DK| = |LB| = 2 \text{ cm}, \quad |KL| = 3 \text{ cm}$$

$$\Rightarrow A(ABCD) = ?$$

- A) 3 B) 6 C) 12 D) 18 E) 24

4.



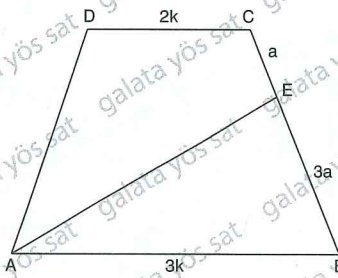
ABCD yamuk (ABCD trapezoid)

$$|AB| = 5 \text{ cm}, \quad |DC| = 1 \text{ cm}, \quad A(DCE) = 1 \text{ cm}^2$$

$$\Rightarrow A(ADE) = ?$$

- A) 3 B) 5 C) 7 D) 9 E) 13

2.



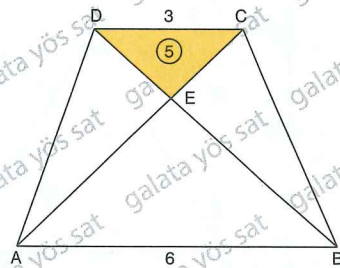
ABCD yamuk (ABCD trapezoid), $A(ABE) = 9$

$$|AB| = 3k, \quad |DC| = 2k, \quad |CE| = a, \quad |EB| = 3a$$

$$\Rightarrow A(ABCD) = ?$$

- A) 20 B) 24 C) 28 D) 32 E) 36

5.



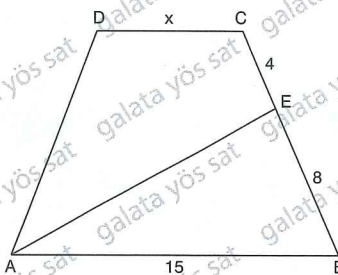
ABCD yamuk (ABCD trapezoid)

$$|AB| = 6 \text{ cm}, \quad |DC| = 3 \text{ cm}, \quad A(DCE) = 5 \text{ cm}^2$$

$$\Rightarrow A(ABCD) = ?$$

- A) 20 B) 25 C) 35 D) 45 E) 60

3.



ABCD yamuk (ABCD trapezoid)

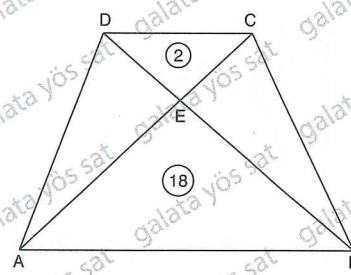
$$|AB| = 15 \text{ cm}, \quad |CE| = 4 \text{ cm}, \quad |EB| = 8 \text{ cm}$$

$$A(ADCE) = A(ABE)$$

$$\Rightarrow x = ?$$

- A) 1 B) 2 C) 3 D) 4 E) 5

6.



ABCD yamuk (ABCD trapezoid)

$$A(AEB) = 18 \text{ cm}^2, \quad A(DEC) = 2 \text{ cm}^2$$

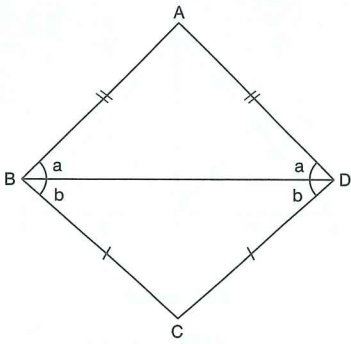
$$\Rightarrow A(CEB) = ?$$

- A) 6 B) $6\sqrt{2}$ C) $6\sqrt{3}$ D) 8 E) $8\sqrt{3}$

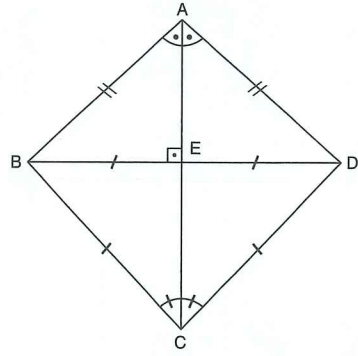
ÜNİTE 16

Unit 16

Deltoid /
Deltoid

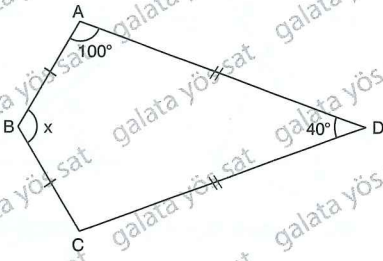


ABCD deltoid, $m(\widehat{ABC}) = m(\widehat{ADC})$



ABCD deltoid, $[AC]$; açıortay (bisector)
 $[AC] \perp [BD]$, $|BE| = |ED|$

1.

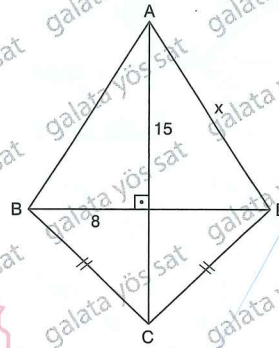


ABCD deltoid

$\Rightarrow x = ?$

- A) 100 B) 110 C) 120 D) 130 E) 140

3.

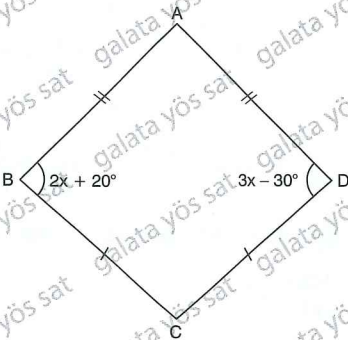


ABCD deltoid

$x = ?$

- A) 14 B) 15 C) 16 D) 17 E) 18

2.

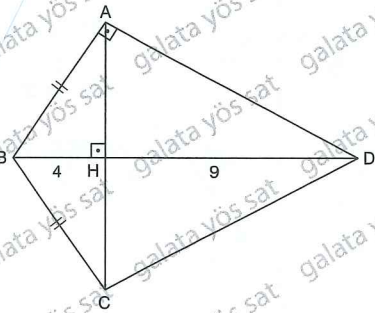


ABCD deltoid

$\Rightarrow x = ?$

- A) 40 B) 45 C) 50 D) 55 E) 60


4.



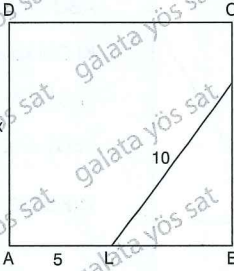
ABCD deltoid

$\Rightarrow |HC| = ?$

- A) 6 B) $\frac{11}{2}$ C) 5 D) $\frac{9}{2}$ E) 4



7.



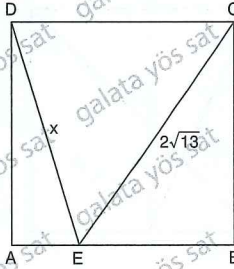
ABCD kare (ABCD square)

$|AL| = 5 \text{ cm}$, $|KL| = 10 \text{ cm}$, $|KC| = 3 \text{ cm}$

$\Rightarrow x = ?$

- A) 11 B) 12 C) 13 D) 14 E) 15

8.



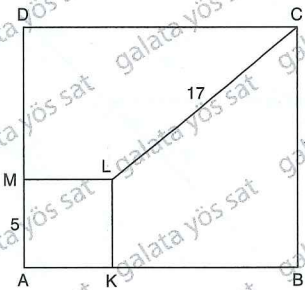
ABCD kare (ABCD square)

$|CD| = 6 \text{ br}$, $|EC| = 2\sqrt{13} \text{ br}$

$\Rightarrow x = ?$

- A) $\sqrt{38}$ B) $2\sqrt{10}$ C) $3\sqrt{5}$ D) $4\sqrt{3}$ E) $5\sqrt{2}$

9.



ABCD dikdörtgen (ABCD rectangle)

AKLM kare (AKLM square)

$|MA| = 5 \text{ cm}$, $|CL| = 17 \text{ cm}$, $|BC| = 13 \text{ cm}$

$\Rightarrow A(ABCD) = ?$

- A) 195 B) 221 C) 260 D) 273 E) 286

10.



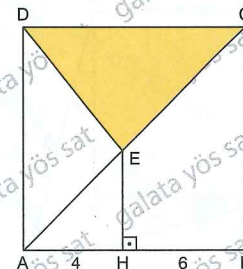
ABCD kare (ABCD square)

$|DE| = 3 \text{ cm}$, $|EF| = 7 \text{ cm}$, $|FB| = 10 \text{ cm}$

$\Rightarrow A(ABCD) = ?$

- A) 144 B) 140 C) 121 D) 100 E) 81

11.



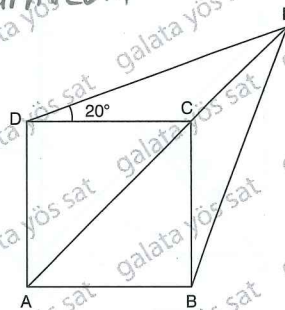
ABCD kare (ABCD square)

$[EH] \perp [AB]$, $|AH| = 4 \text{ cm}$, $|HB| = 6 \text{ cm}$

$\Rightarrow A(DEC) = ?$

- A) 20 B) 30 C) 35 D) 40 E) 45

12. yoslearn.com



ABCD kare (ABCD square)

$m(\widehat{EAD}) = 20^\circ$

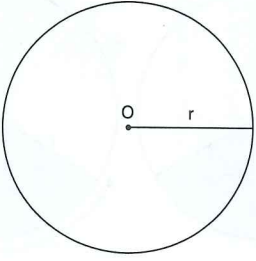
$\Rightarrow m(\widehat{DEC}) = ?$

- A) 45 B) 50 C) 55 D) 60 E) 65

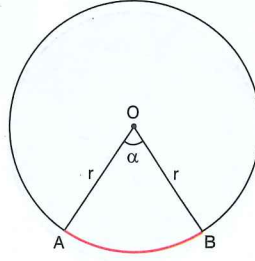
ÜNİTE 21

Unit 21

Dairede Alan /
Circle

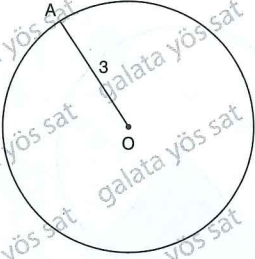


Çemberin çevresi = $2\pi r$
(The circumference of a circle)



$$|\widehat{AB}| = 2\pi r \cdot \frac{\alpha}{360}$$

1.

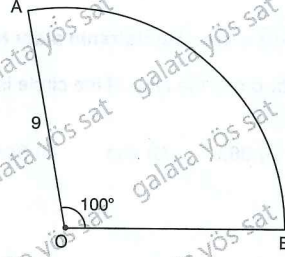


O, çemberin merkezi (O, center)
 $|OA| = 3$ cm

⇒ Çemberin çevresi kaç cm dir?
(What is the circumference of a circle?)

- A) 3π B) 4π C) 6π D) 8π E) 10

3.



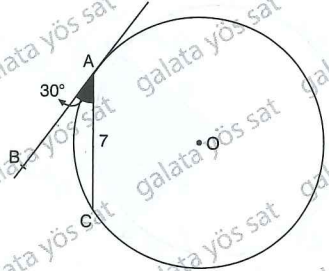
O, çemberin merkezi (O, center)
 $m(\widehat{AOB}) = 100^\circ$, $|OA| = 9$ cm

⇒ $|\widehat{AB}| = ?$

- A) 5π B) 6π C) 9π D) 10π E) 16π



2.

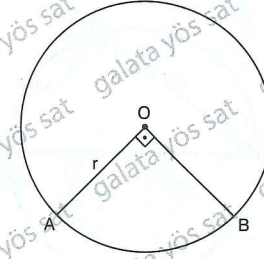


O, çemberin merkezi (O, center)
 $|AC| = 7$ cm, $m(\widehat{BAC}) = 30^\circ$

⇒ Çemberin çevresi kaç cm dir?
(What is the circumference of a circle?)

- A) 7 B) 7π C) 14 D) 14π E) 21

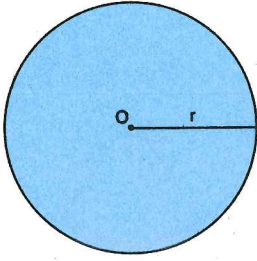
4.



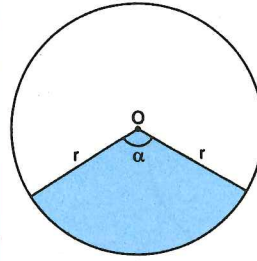
O, çemberin merkezi (O, center)
 $|\widehat{AB}| = 2\pi$ cm

⇒ $r = ?$

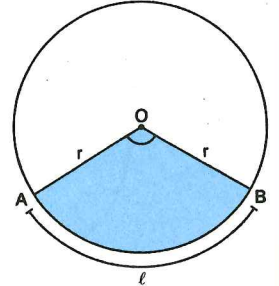
- A) 3 B) 4 C) 6 D) 8



O, çemberin merkezi (O, center), r ; yarıçap (radius)
Alan (Area) = πr^2



Dilimin alanı = $\pi r^2 \frac{\alpha}{360}$
(Area)

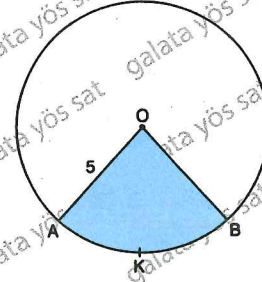


$|\widehat{AB}| = \ell$ cm
Dilimin alanı = $\frac{r \cdot \ell}{2}$
(Area)

1. Çevresi $12\sqrt{2}\pi$ cm olan dairenin alanı kaç cm^2 dir? 3.

Circle $12\sqrt{2}\pi$ cm is the area of the circle is cm^2 ?

- A) 24π B) 36π C) 48π D) 64π E) 72π



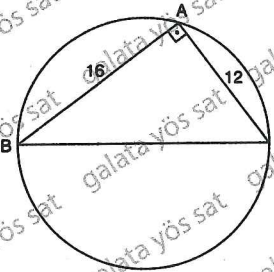
O, çemberin merkezi (O, center)

$|OA| = 5$ cm, $m(\widehat{AKB}) = 72^\circ$

$\Rightarrow TA = ?$ (Shaded area)

- A) 4π B) 5π C) 8π D) 10π E) 12π

2.

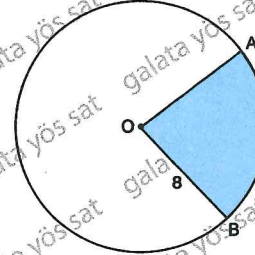


$[AB] \perp [AC]$, $|AC| = 12$ cm, $|AB| = 16$ cm

\Rightarrow Dairenin alanı kaç cm^2 dir?
(What is the area of the circle?)

- A) 30π B) 36π C) 64π D) 80π E) 100π

4.



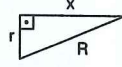
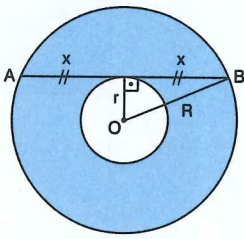
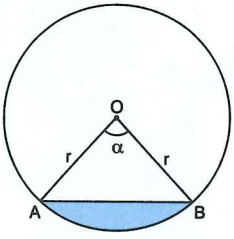
O, çemberin merkezi (O, center)

$|\widehat{AB}| = 4$ cm, $|OB| = 8$ cm

$\Rightarrow TA = ?$ (Shaded area)

- A) 12 B) 16 C) 18 D) 20 E) 24

Dairede Alan / Circle

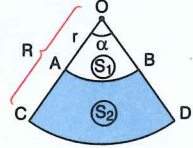
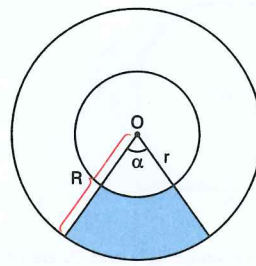


O, çemberin merkezi (O, center)

$$TA = \pi r^2 \frac{\alpha}{360} - \frac{1}{2} \cdot r \cdot r \cdot \sin \alpha$$

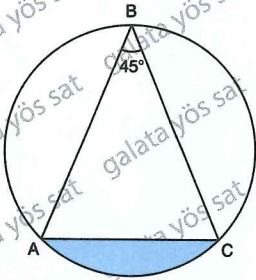
$$R^2 = r^2 + x^2$$

$$TA = \pi(R^2 - r^2)$$



$$TA = \pi R^2 \frac{\alpha}{360} - \pi r^2 \frac{\alpha}{360} \quad \left(\frac{r}{R}\right)^2 = \frac{S_1}{S_1 + S_2}, \quad \frac{r}{R} = \frac{|AB|}{|CD|}$$

1.

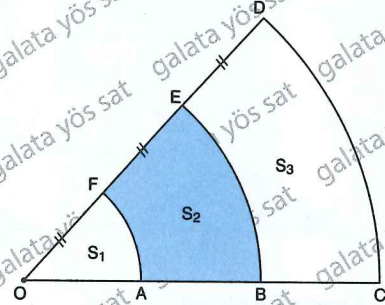


$$m(\widehat{AC}) = 45^\circ, \quad |AC| = 12\sqrt{2} \text{ cm}$$

⇒ TA = ? (Shaded area)

- A) $72\pi - 36$ B) $36\pi - 24$ C) $24\pi - 18$
 D) $36\pi - 72$ E) $72\pi - 24$

3.



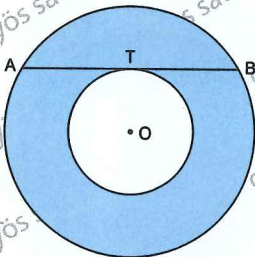
O, çemberin merkezi (O, center)

$$S_3 - S_1 = 16$$

⇒ S2 = ?

- A) 4 B) 8 C) 12 D) 16 E) 20

2.



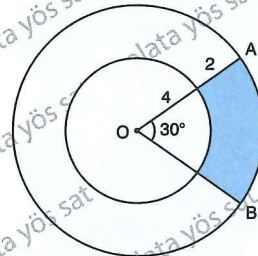
O, çemberin merkezi (O, center)

$$|AB| = 8 \text{ cm}$$

⇒ TA = ? (Shaded area)

- A) 16π B) 17π C) 18π D) 20π E) 24π

4.



O, çemberin merkezi (O, center)

$$m(\widehat{AOB}) = 30^\circ$$

⇒ TA = ? (Shaded area)

- A) $\frac{5\pi}{3}$ B) $\frac{5\pi}{2}$ C) 5π D) 6π E) 8π

ÜNİTE 28

Unit 28

Vektörler /
Vectors

\vec{a} \vec{AB} $-\vec{a}$ \vec{BA}
 $\vec{AB} = -\vec{BA}$

$x \in \mathbb{R}$
 $x > 0$ $x \cdot \vec{a}$
 $x < 0$ $x \cdot \vec{a}$

\vec{a} \vec{b} $\vec{b} + \vec{a}$
 $\vec{b} + \vec{a} = ?$
 iki türlü bulunur.

(Paralelkenar yöntemi) (Uc uca ekleme yöntemi)

1. $2\vec{b} = ?$
 $-3\vec{c} = ?$

3. $\vec{a} - 2\vec{b} = ?$

A) $2\vec{b}$ $3\vec{c}$

B) $2\vec{b}$ $3\vec{c}$

C) $2\vec{b}$ $3\vec{c}$

D) $2\vec{b}$ $-3\vec{c}$

E) $2\vec{b}$ $3\vec{c}$

A) $\vec{a} - 2\vec{b}$

B) $\vec{a} - 2\vec{b}$

C) $\vec{a} - 2\vec{b}$

D) $\vec{a} - 2\vec{b}$

E) $\vec{a} + 2\vec{b}$

2. $-\frac{\vec{a}}{2} = ?$
 $\frac{\vec{b}}{3} = ?$

4. $2\vec{b} - \vec{a} + 3\vec{c} = ?$

A) $-\frac{\vec{a}}{2}$ $\frac{\vec{b}}{3}$

B) $-\frac{\vec{a}}{2}$ $\frac{\vec{b}}{3}$

C) $-\frac{\vec{a}}{2}$ $\frac{\vec{b}}{3}$

D) $-\frac{\vec{a}}{2}$ $\frac{\vec{b}}{3}$

E) $-\frac{\vec{a}}{2}$ $\frac{\vec{b}}{3}$


A) $2\vec{b} - \vec{a} + 3\vec{c}$

B) $2\vec{b} - \vec{a} + 3\vec{c}$

C) $2\vec{b} - \vec{a} + 3\vec{c}$

D) $2\vec{b} - \vec{a} + 3\vec{c}$

E) $2\vec{b} - \vec{a} + 3\vec{c}$



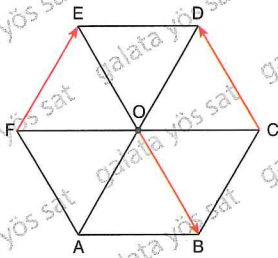
- $\overline{AB} = \vec{B} - \vec{A}$
- $\overline{AB} + \overline{BC} = \overline{AC}$
- $\overline{AB} + \overline{BA} = \overline{AA} = 0$



$$\overline{AB} = \vec{B} - \vec{A} = (x_2 - x_1, y_2 - y_1)$$

youlearn.com

1.

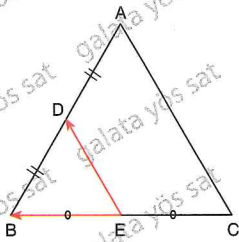


ABCDEF altgen, (ABCDEF hexagon)

$$\Rightarrow \overline{OB} + \overline{FE} + \overline{CB} = ?$$

- A) \overline{FA} B) \overline{AF} C) \overline{FE} D) \overline{OF} E) \overline{BC}

2.



$$|AD| = |DB|$$

$$\Rightarrow \frac{\overline{BA}}{2} - \frac{\overline{AC}}{2} + \frac{\overline{CB}}{2} = ?$$

- A) \overline{BD} B) \overline{AD} C) \overline{BC} D) \overline{BA} E) \overline{CA}

3.

$$\vec{A}(3, -5)$$

$$\vec{B}(-4, 7)$$

$$\Rightarrow \overline{AB} = ?$$

- A) $(-1, 2)$ B) $(1, -2)$ C) $(2, -1)$
 D) $(-7, 12)$ E) $(12, -7)$

4.

$$\vec{AC}(-4, 2)$$

$$\vec{A}(1, 4)$$

$$\Rightarrow \vec{C}(x, y) = ?$$

- A) $(-6, 3)$ B) $(3, -6)$ C) $(-3, 6)$
 D) $(5, 6)$ E) $(-3, -6)$

7. $\vec{A} = (3, -6)$

$\vec{B} = (4, -8)$

$\vec{C} = (3, 8)$

$\vec{D} = (n, 6)$

$\Rightarrow \vec{AB} \parallel \vec{CD} \Rightarrow n = ?$

- A) 2 B) 3 C) 4 D) 5 E) 6

8. $\vec{A} = \left(\frac{x-1}{4}, \frac{x-3}{4} \right)$

\vec{A} birim vektörü ise x in alacağı değerler toplamı kaçtır?

What is the sum of the values that x will take if the unit vector is \vec{A} ?

- A) -2 B) 2 C) 3 D) 4 E) 5

9. $\vec{A} = 3\vec{e}_2 - \vec{e}_2$

$\vec{B} = \vec{e}_1 + 4\vec{e}_2$

$\Rightarrow \vec{AB} = ?$

- A) $-2\vec{e}_1 + \vec{e}_2$ B) $2\vec{e}_1 + 5\vec{e}_2$ C) $-2\vec{e}_1 + 5\vec{e}_2$
 D) $\vec{e}_1 - 4\vec{e}_2$ E) $3\vec{e}_1 - 2\vec{e}_2$

10. $\langle \vec{A}, \vec{B} \rangle = 10\sqrt{2}$ cm

$\|\vec{A}\| = 2$ cm

\vec{A} ve \vec{B} vektörleri arasındaki açı 45° dir.

(The angle between the \vec{A} and \vec{B} vectors is 45° .)

$\Rightarrow \|\vec{B}\| = ?$

- A) 5 B) 10 C) 15 D) 16 E) 20

11. $\vec{A} = (8, x+2)$

$\vec{B} = (x, 6)$

$\Rightarrow \vec{AB} \perp \vec{B} \Rightarrow \sum x = ?$

- A) 10 B) 12 C) 14 D) 16 E) 18

12. $\vec{A} = (3, -3)$

$\vec{B} = (a, a+b)$

$\Rightarrow \vec{A} \parallel \vec{B} \Rightarrow \frac{b}{a} = ?$

- A) -3 B) -2 C) -1 D) 1 E) 3

